


KIRF- To recall addition and subtraction facts for numbers within 20 (CHALLENGE 2)

Write an addition sentence to match this image.



$$\square + \square = \square$$

Fill in the missing numbers.

$$18 - \square = 13$$

$$\square - 5 = 13$$

$$12 + \square = 19$$

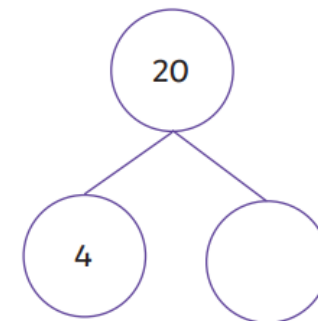
$$\square + 3 = 16$$

Solve this problem.

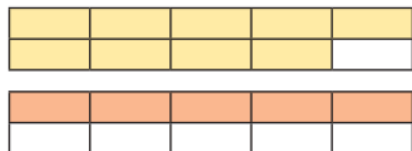
Chester the dog had 15 bones in his treat box. He ate 7 of them.

How many bones were left in the box?

Complete the part-whole model.



Write an addition number sentence to match the tens frames.



$$\square + \square = \square$$

Complete the calculations

$$20 - \square = 9$$

$$\square - 5 = 6$$

$$9 + \square = 17$$

$$\square + 5 = 19$$

Solve this problem.

Alfie has 15 sweets in his bag. His friend Millie has none. Alfie gives Millie 8 of his sweets.

Who has the most sweets now?

Using only the 3 numbers below, write as many addition and subtraction sentences as you can.

17 9 8