


Homework- Challenge 2- Due in 5th March 2025

Arrays are pictures that help us see numbers. Number sentences are shown with dots and arranged into rows and columns.

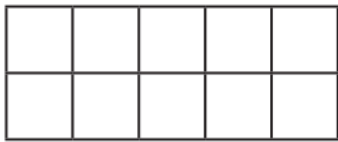

Here is an example:



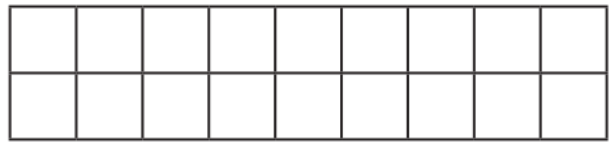

3	+	3	=	6
2	×	3	=	6

1. Write the multiplication calculation and repeated addition for each array.

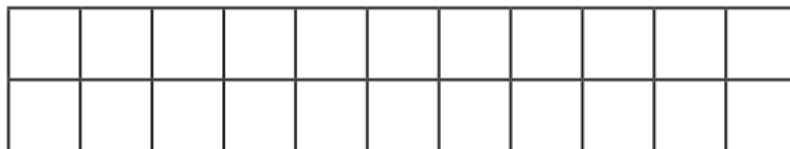
2×2



4×2



5×2



2. Write the multiplication calculation and repeated addition for each array.

$_ \times _$



$_ \times _$

