

Homework- Challenge 1-

Due in 5th March 2025

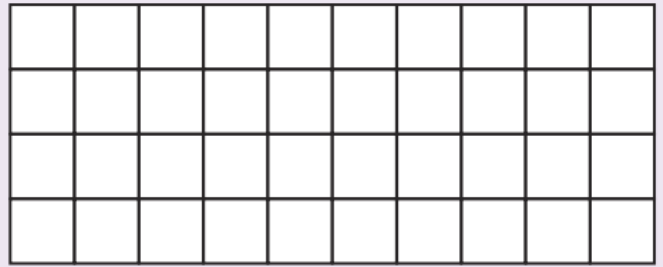
Draw and colour an array to match the two times table multiplication fact. An array is a picture which represents a multiplication fact. Arrays can help us learn our times tables.

The first one has been done as an example.

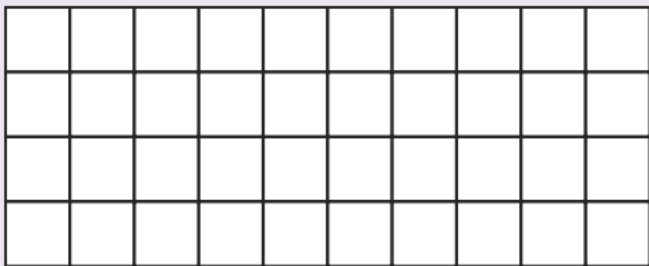
$$2 \times 3 =$$



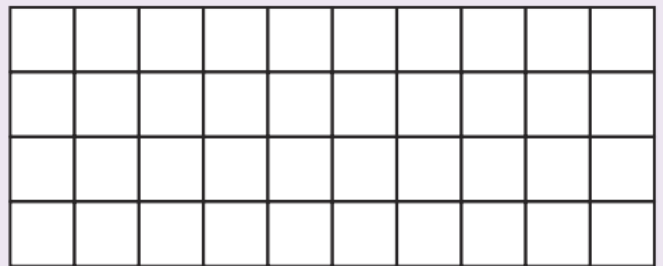
$$2 \times 5 =$$



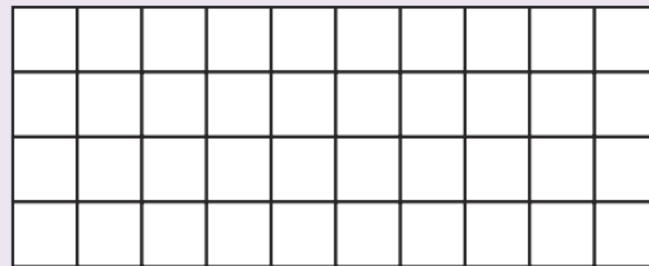
$$2 \times 9 =$$



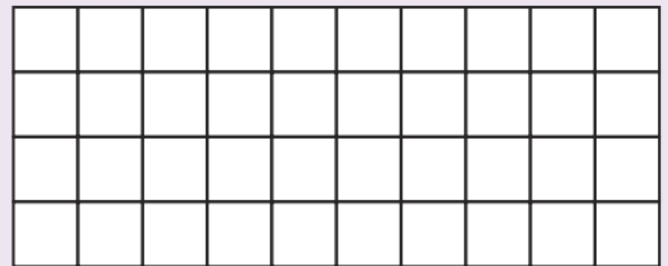
$$2 \times 2 =$$



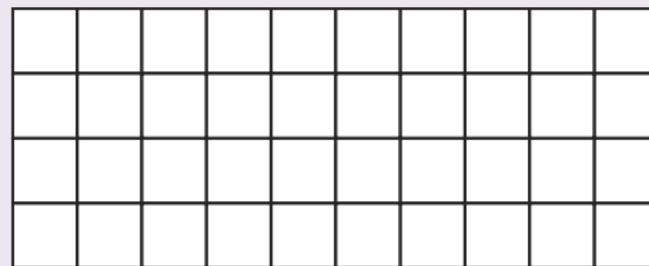
$$2 \times 4 =$$



$$2 \times 7 =$$



$$2 \times 10 =$$



$$2 \times 8 =$$

