


Maths homework – Challenge 1

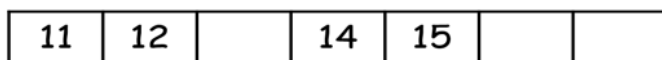
This week we have been looking at 2-digit numbers represented in different ways. Complete the questions below.

Homework to be completed and handed in by **Wednesday 18th September 2024.**

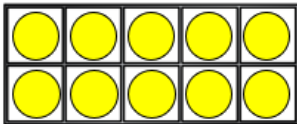
Complete the number track.



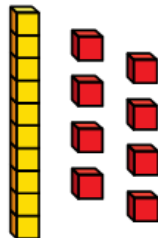
Complete the number track.



What number is represented?

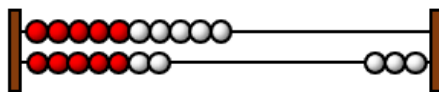


What number is shown?



There is 1 ten and ___ ones. The number is ___

What number is shown?



There is 1 ten and ___ ones. The number is ___