
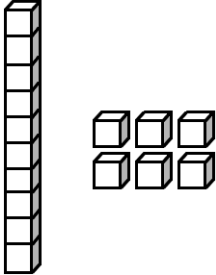
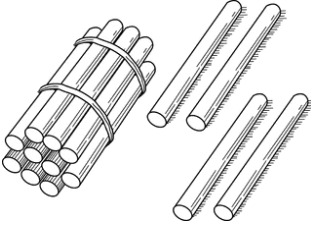
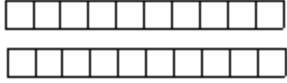


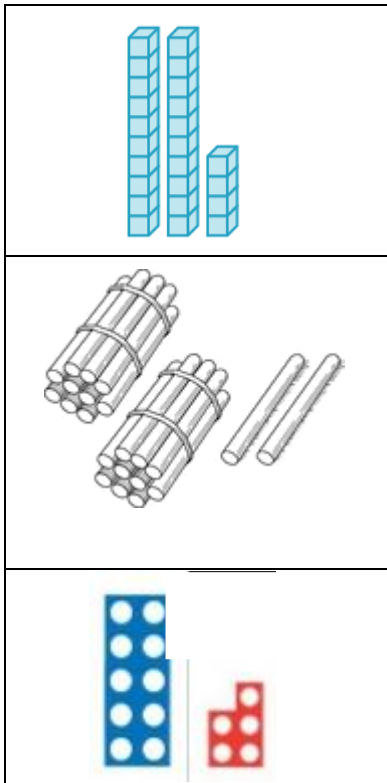


Homework- Due in Wednesday 9<sup>th</sup> October. Challenge 1.

	
<p>tens ____ ones ____ number ____</p>	<p>tens ____ ones ____ number ____</p>
	
<p>tens ____ ones ____ number ____</p>	<p>tens ____ ones ____ number ____</p>
	
<p>tens ____ ones ____ number ____</p>	<p>tens ____ ones ____ number ____</p>

Using 3 colours, match each place value picture to the corresponding number and words.



22

fifteen

24

one ten and five ones

$20 + 4$

two tens and two ones

Dan has written the number **twenty two** as **20 2**.

Is he correct? \_\_\_\_\_

Explain how you know.

---

---

---

---

