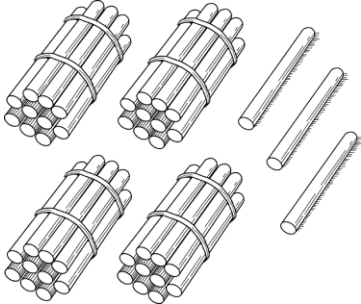
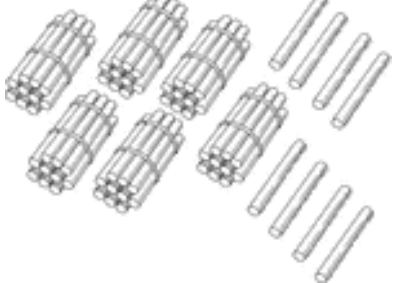
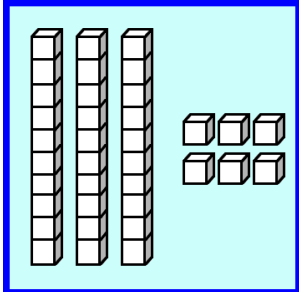



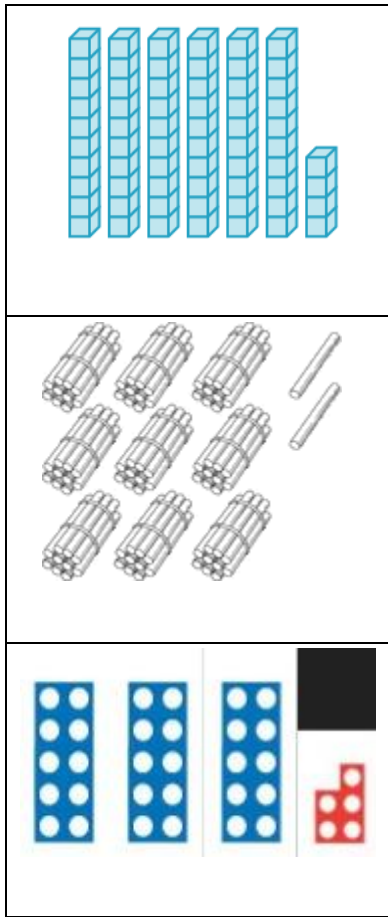


Homework- Due in Wednesday 9<sup>th</sup> October. Challenge 2.

	
<p>tens ____ ones ____ number ____</p>	<p>tens ____ ones ____ number ____</p>
	
<p>tens ____ ones ____ number ____</p>	<p>tens ____ ones ____ number ____</p>
	
<p>tens ____ ones ____ number ____</p>	<p>tens ____ ones ____ number ____</p>

Match each place value picture to the corresponding number and words.



92
thirty five
64

three tens and five ones
$60 + 4$
nine tens and two ones

Using 7 0 2 how many 2 digit numbers can you make?

What are the **largest** and **smallest numbers** you can make?

--	--

--	--