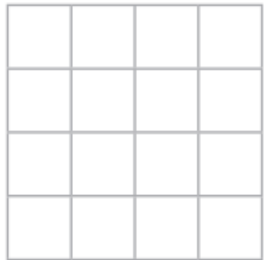


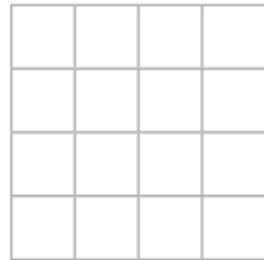
Year 4 Maths Homework due Wednesday 29th March

Draw a shape with the given area.

a) area = 7 squares



b) area = 13 squares

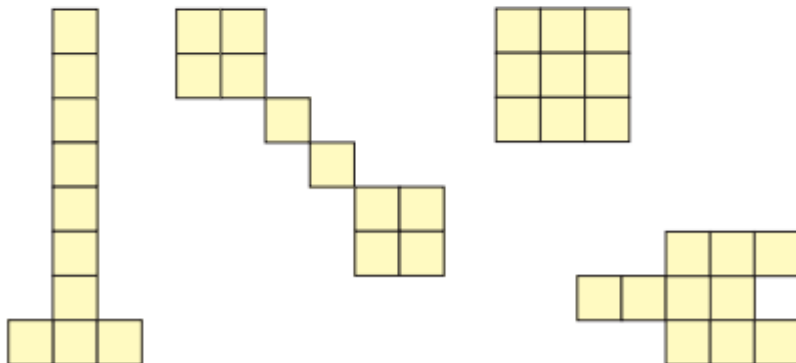


Amir has created a shape.



My shape has an area of 10 squares and is rectilinear.

Tick the shapes that Amir could have made.



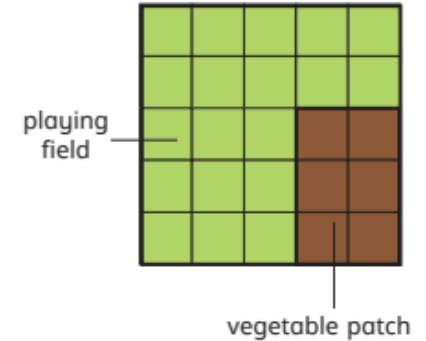
Here are the plans of two school fields.

Each has a playing field and a vegetable patch.

High Street School



Main Road School



a) What is the difference in the area of the playing fields?

squares

b) What is the difference in the area of the vegetable patches?

squares

c) High Street School doubles the size of its vegetable patch.

Main Road School adds 1 square to its vegetable patch.

Which school now has the larger vegetable patch?

Show your workings.

_____ School now has the larger vegetable patch.